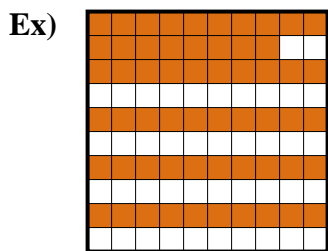
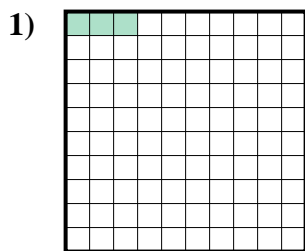




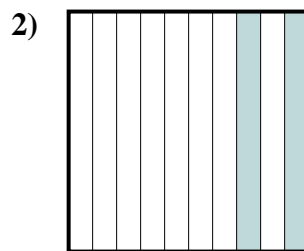
Determine the value written as a fraction , decimal & a percent.



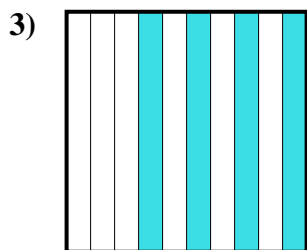
fraction $\frac{58}{100}$
 decimal 0.58
 percent 58



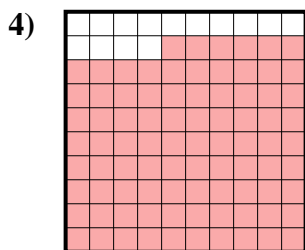
fraction $\frac{3}{100}$
 decimal 0.03
 percent 3



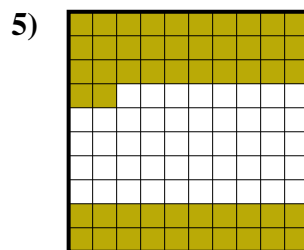
fraction $\frac{2}{10}$
 decimal 0.2
 percent 20



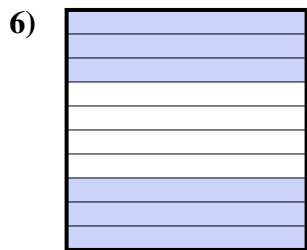
fraction $\frac{4}{10}$
 decimal 0.4
 percent 40



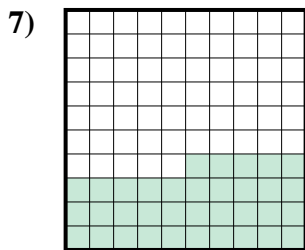
fraction $\frac{86}{100}$
 decimal 0.86
 percent 86



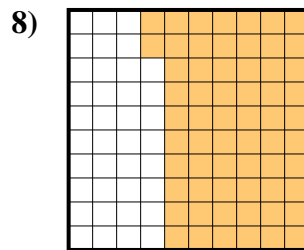
fraction $\frac{52}{100}$
 decimal 0.52
 percent 52



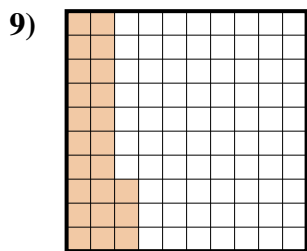
fraction $\frac{6}{10}$
 decimal 0.6
 percent 60



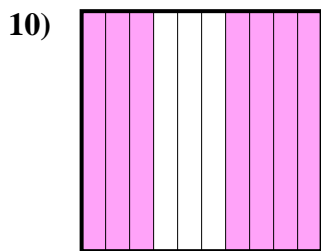
fraction $\frac{35}{100}$
 decimal 0.35
 percent 35



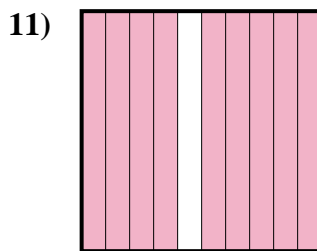
fraction $\frac{62}{100}$
 decimal 0.62
 percent 62



fraction $\frac{23}{100}$
 decimal 0.23
 percent 23



fraction $\frac{7}{10}$
 decimal 0.7
 percent 70



fraction $\frac{9}{10}$
 decimal 0.9
 percent 90

Answers

Ex.	$\frac{58}{100}$	0.58	58%
1.	$\frac{3}{100}$	0.03	3%
2.	$\frac{2}{10}$	0.2	20%
3.	$\frac{4}{10}$	0.4	40%
4.	$\frac{86}{100}$	0.86	86%
5.	$\frac{52}{100}$	0.52	52%
6.	$\frac{6}{10}$	0.6	60%
7.	$\frac{35}{100}$	0.35	35%
8.	$\frac{62}{100}$	0.62	62%
9.	$\frac{23}{100}$	0.23	23%
10.	$\frac{7}{10}$	0.7	70%
11.	$\frac{9}{10}$	0.9	90%